

UNIVERSITY OF JAFFNA, SRI LANKA
FACULTY OF ALLIED HEALTH SCIENCES
FIRST YEAR SECOND SEMESTER EXAMINATION IN BPharmHons – 2019
PHACH 1264 PHARMACEUTICAL CHEMISTRY II

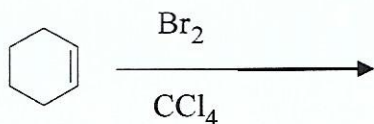
Date: 27.01.2022

Time: 3 Hours

ANSWER ALL THE SIX QUESTIONS

1. 1.1 Define “Chemical reaction”. **(10 Marks)**
- 1.2 Discuss, the factors that determine the product formation. **(60 Marks)**
- 1.3 Explain how the catalyst effect the rate of the reaction. **(30 Marks)**

2. 2.1 Considering the following substrate and reagents and answer the following questions.

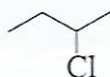


- 2.1.1 Predict the type of the reaction and define it. **(20 Marks)**
 - 2.1.2 Give the reaction mechanism and specify the stereochemistry of the product. **(30 Marks)**
 - 2.1.3 Draw the energy level diagram. **(20 Marks)**
 - 2.1.4 Draw the structures of transition state and intermediates. **(30 Marks)**
3. 3.1 Define Alkyne. **(15 Marks)**
 - 3.2 Give the preparation methods of alkyne. **(45 Marks)**
 - 3.3 List the pharmaceutical applications of the followings:
 - 3.3.1 Alkyne
 - 3.3.2 Alkyl halide **(40 Marks)**

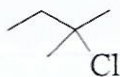
4. 4.1 4.1.1 What is meant by carboxylic acids? (15 Marks)

4.1.2 Describe the physical properties of carboxylic acids. (40 Marks)

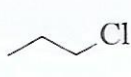
4.2 Arrange the following molecules in the order of increasing reactivity/ability for a unimolecular elimination reaction (E1) with justification.



4.3.1



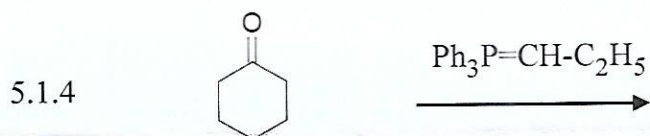
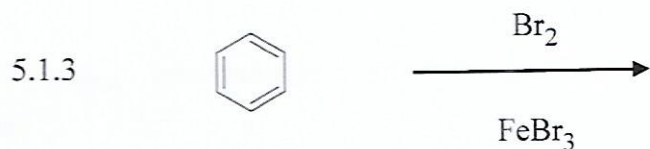
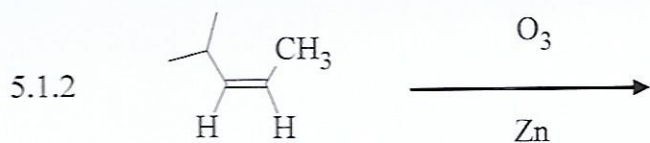
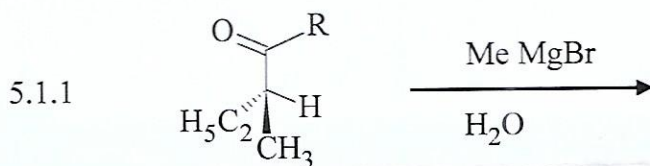
4.3.2



4.3.3

(45 Marks)

5. 5.1 Give the final products and mechanism of the following reactions.



(100 Marks)

6. 6.1 Briefly describe the therapeutic importance of pyridine. **(30 Marks)**
- 6.2 Give the different types of reactions that occur in pyridine. **(40 Marks)**
- 6.3 Explain why electrophilic substitution in pyridine occurs at position C-3 and not at C-2. **(30 Marks)**